

**7a -- part 1
(self-
assessment)**

Name _____

Period _____

Credit for this assignment is based on evidence that you tried, NOT on if it is correct.

Completely on your own, do the problems on the front and back of this page to see how ready you are for the quiz tomorrow. When done, Check if your answers are correct and decide which assignment is the most important for you to do today:

1. Review and practice on making Lewis structure diagrams of covalent molecules;
2. A reading about carbon-based compounds and molecules such as: carbohydrates, cellulose, cholesterol, saturated fats, proteins, DNA etc.

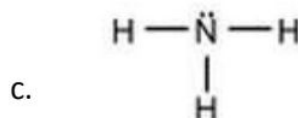
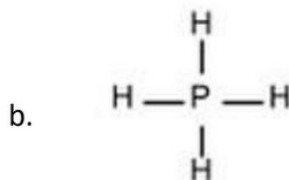
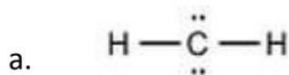
#1 Make a Lewis diagram for: H_2O

#2 Make a Lewis diagram for: CS_2

#3 Make a Lewis diagram for: CHCl_3

#4

Which of the following is a correct Lewis Dot diagram?



How did you know?
